

Impulse response of first and second order systems

First order system $H(s) = \frac{K\tau}{s + 1} \Rightarrow h(t) = Ke^{-\frac{t}{\tau}}$

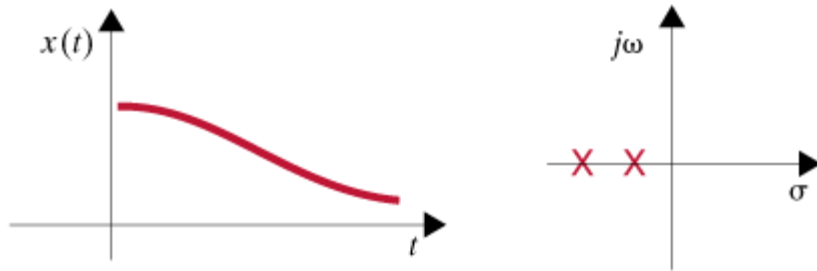
Normalized second order system

$$H(s) = \frac{\omega_0^2}{s^2 + 2\zeta\omega_0s + \omega_0^2}$$

poles: $s_{1,2} = -\zeta\omega_0 \pm \omega_0\sqrt{\zeta^2 - 1}$

Case 1: $\zeta > 1$: Overdamped network

$$h(t) = K_1 e^{-(\zeta\omega_0 + \omega_0\sqrt{\zeta^2 - 1})t} + K_2 e^{-(\zeta\omega_0 - \omega_0\sqrt{\zeta^2 - 1})t}$$

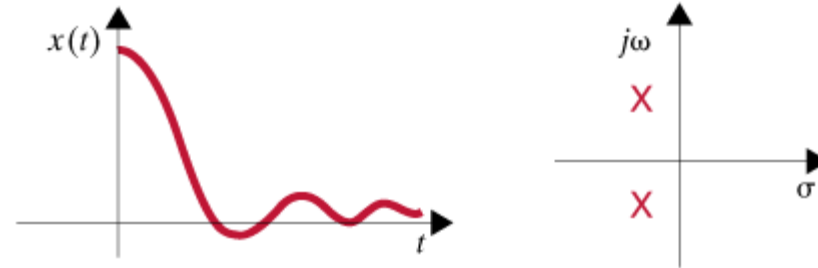


(a)

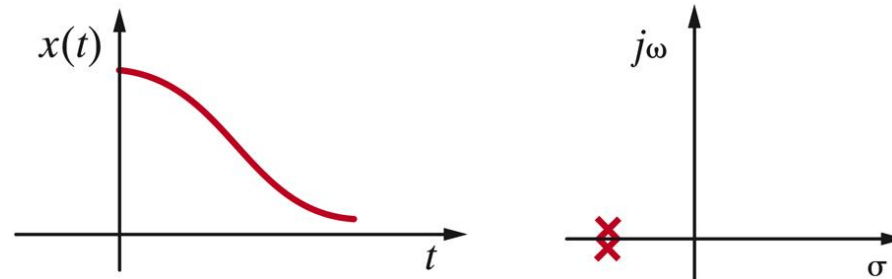
Case 2: $\zeta < 1$: Underdamped network

poles: $s_{1,2} = -\zeta\omega_0 \pm j\omega_0\sqrt{1 - \zeta^2}$

$$h(t) = Ke^{-\zeta\omega_0 t} \cos(\omega_0\sqrt{1 - \zeta^2}t + \phi)$$

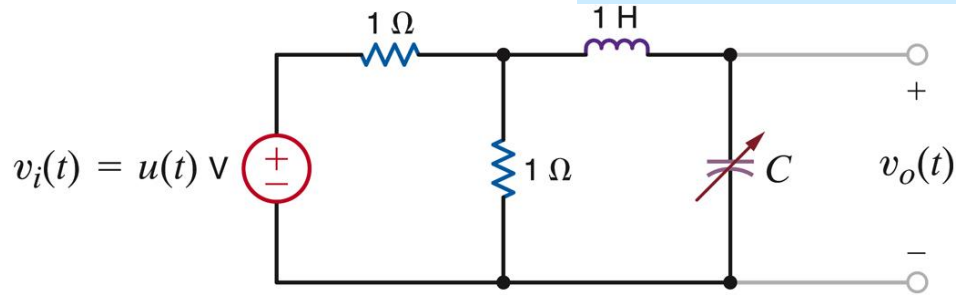


Case 3: $\zeta = 1$: Critically damped network



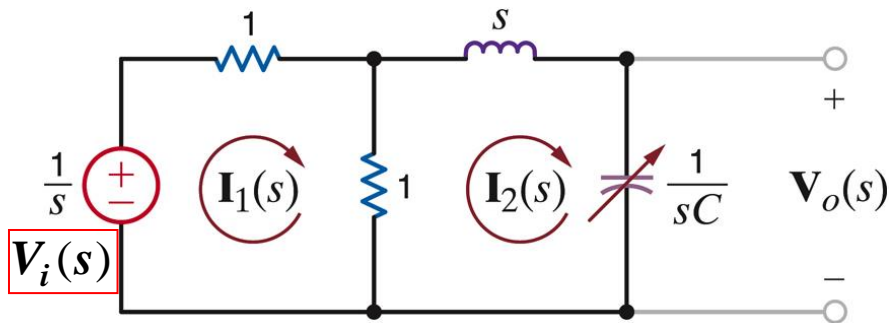
LEARNING EXAMPLE

Determine the transfer function $H(s) = \frac{V_o(s)}{V_i(s)}$



a) $C = 8F \Rightarrow$ poles : $s_{1,2} = -0.25 \pm j0.25$

Transform the circuit to the Laplace domain. All initial conditions set to zero



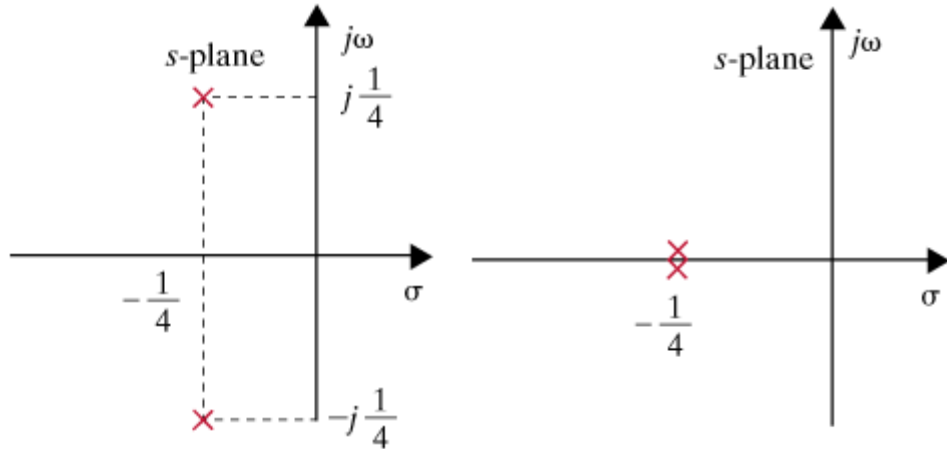
Mesh analysis

$$V_i(s) = 2I_1 - I_2$$

$$0 = -I_1 + \left(1 + s + \frac{1}{sC}\right)I_2$$

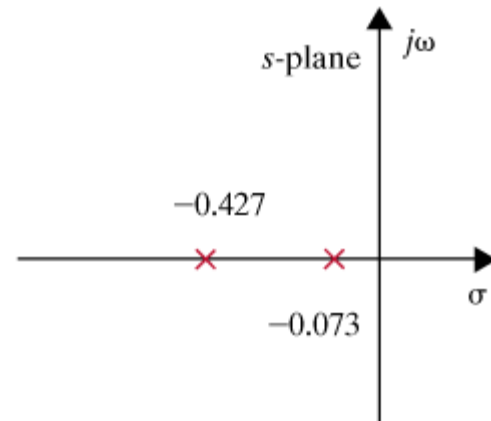
$$V_o(s) = \frac{1}{sC} I_2(s)$$

$$V_o(s) = \frac{(1/2C)}{s^2 + (1/2)s + 1/C}$$



(c) b) $C = 16F \Rightarrow$ poles : $s_{1,2} = -0.25$

c) $C = 32F \Rightarrow$ poles : $s_{1,2} = -0.427, -0.073$



(e)

LEARNING EXTENSION

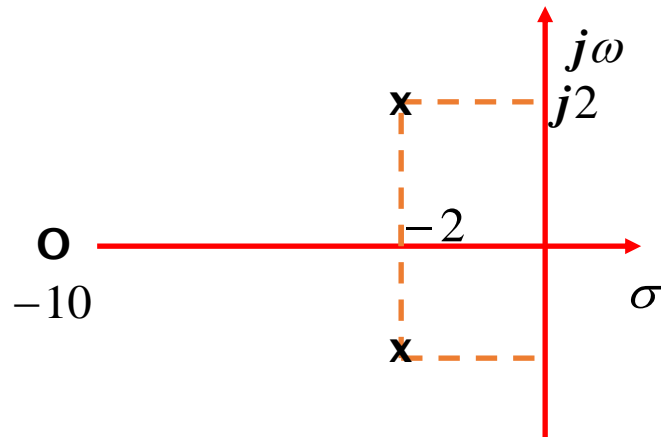
Determine the pole-zero plot, the type of damping and the unit step response

$$H(s) = \frac{s+10}{s^2+4s+8}$$

zero: $z = -10$

poles:

$$s^2 + 4s + 8 = 0 \Rightarrow s_{1,2} = -2 \pm j2$$



$$s^2 + \boxed{4}s + \boxed{8} \Rightarrow \zeta = \frac{\sqrt{2}}{2}$$

$2\zeta\omega_0$ ω_0^2

$$Y(s) = H(s) \frac{1}{s} = \frac{s+10}{s(s^2+4s+8)}$$

$$s^2 + 4s + 8 = (s+2-j2)(s+2+j2)$$

$$Y(s) = \frac{K_1}{s} + \frac{K_2}{s+2-j2} + \frac{K_2^*}{s+2+j2}$$

$$\frac{K_1}{(s+\alpha-j\beta)} + \frac{K_1^*}{(s+\alpha+j\beta)} \leftrightarrow 2|K_1| e^{-\alpha t} \cos(\beta t + \angle K_1) u(t)$$

$$K_1 = sY(s) \Big|_{s=0} = \frac{10}{8}$$

$$K_2 = (s+2-j2)V_o(s) \Big|_{s=-2+j2} = \frac{8+j2}{(-2+j2)(j4)}$$

$$K_2 = \frac{8.25 \angle 14^\circ}{2.83 \angle 135^\circ \times 4 \angle 90^\circ} = 0.73 \angle -211^\circ$$

$$v_o(t) = \left(\frac{10}{8} + 1.46 e^{-2t} \cos(2t - 211^\circ) \right) u(t)$$



Second order networks: variation of poles with damping ratio

Normalized second order system

$$H(s) = \frac{\omega_0^2}{s^2 + 2\zeta\omega_0 s + \omega_0^2}$$

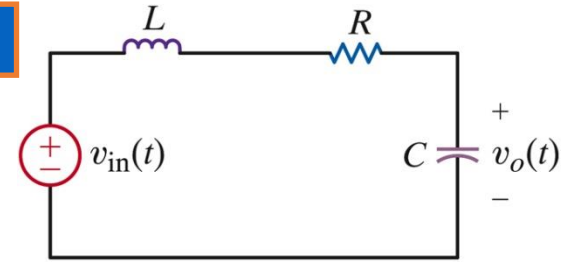
poles: $s_{1,2} = -\zeta\omega_0 \pm \omega_0\sqrt{\zeta^2 - 1}$

Case 2: $\zeta < 1$: Underdamped network

poles: $s_{1,2} = -\zeta\omega_0 \pm j\omega_0\sqrt{1 - \zeta^2}$

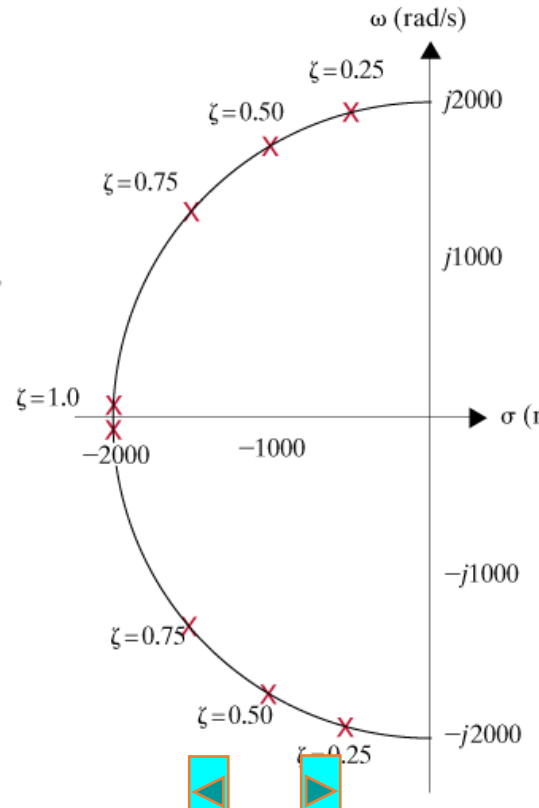
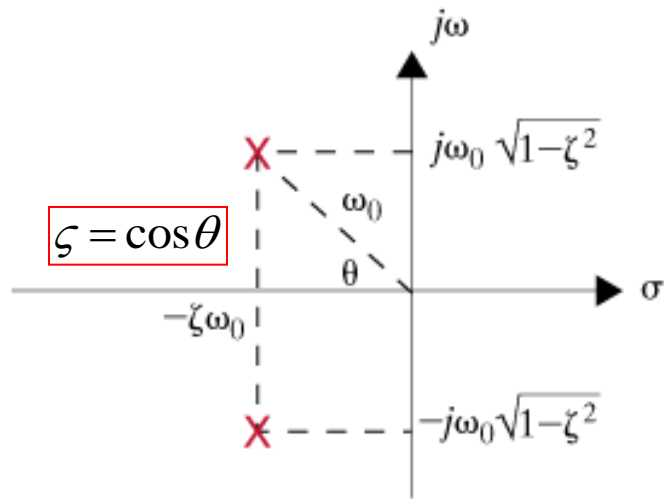
LEARNING EXAMPLE

$$\omega_0^2 = \frac{1}{LC}, \quad 2\zeta\omega_0 = \frac{R}{L}$$



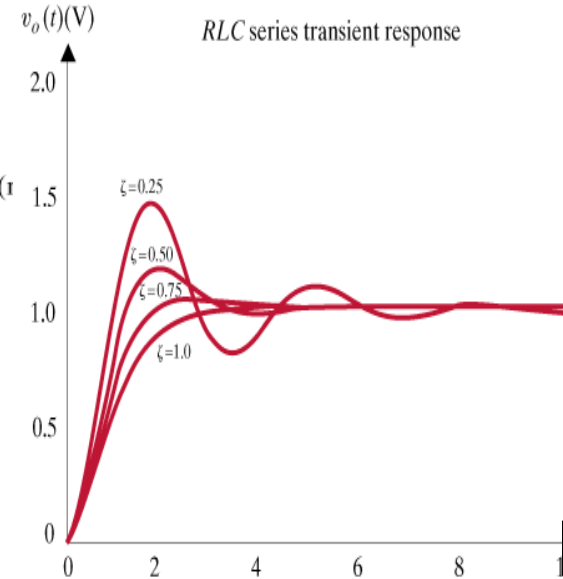
$$G_v(s) = \frac{V_o(s)}{V_{in}(s)} = \frac{\frac{1}{Cs}}{\frac{1}{Cs} + Ls + R}$$

$$= \frac{\frac{1}{LC}}{s^2 + \left(\frac{R}{L}\right)s + \frac{1}{LC}}$$



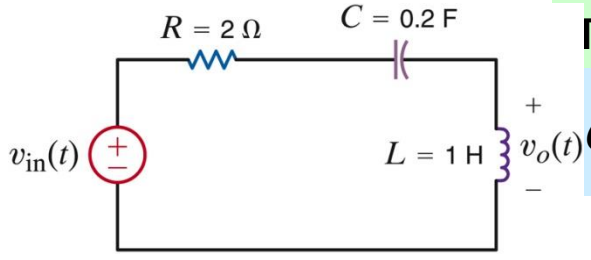
Variation of poles.

Use $\omega_0 = 2000$



POLE-ZERO PLOT/BODE PLOT CONNECTION

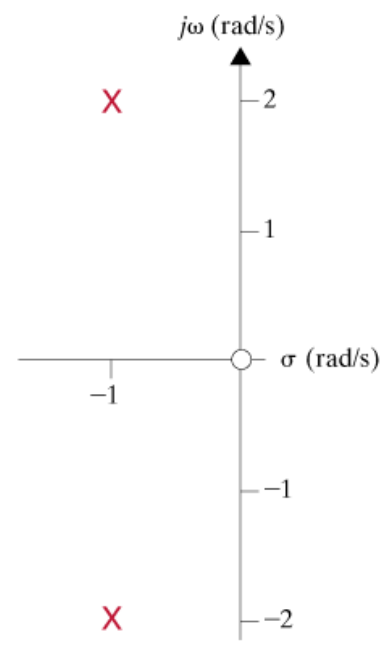
Bode plots display magnitude and phase information of $G(s)|_{s=j\omega}$



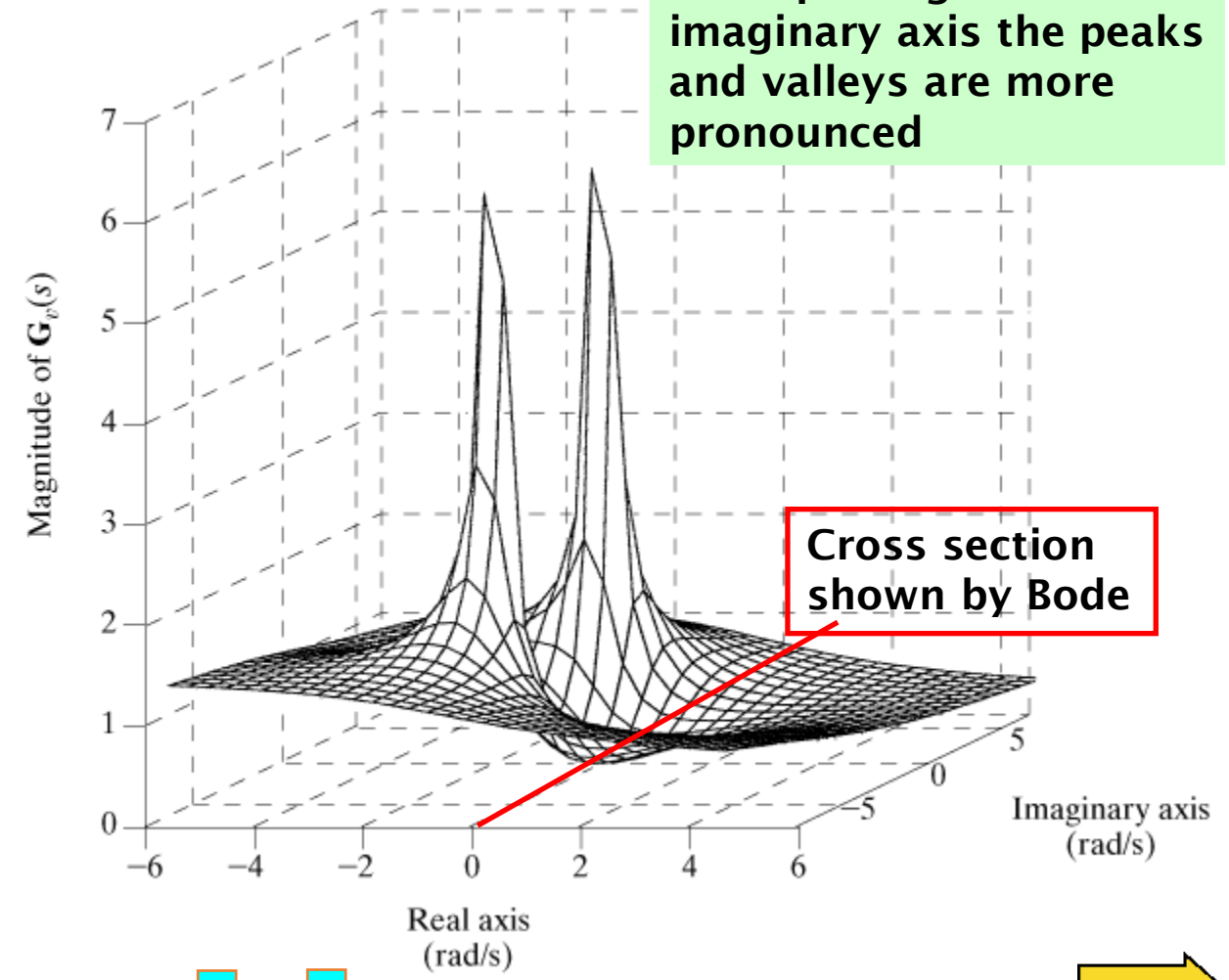
They show a cross section of $G(s)$

$$G(s) = \frac{s^2}{s^2 + 2s + 5}$$

If the poles get closer to imaginary axis the peaks and valleys are more pronounced



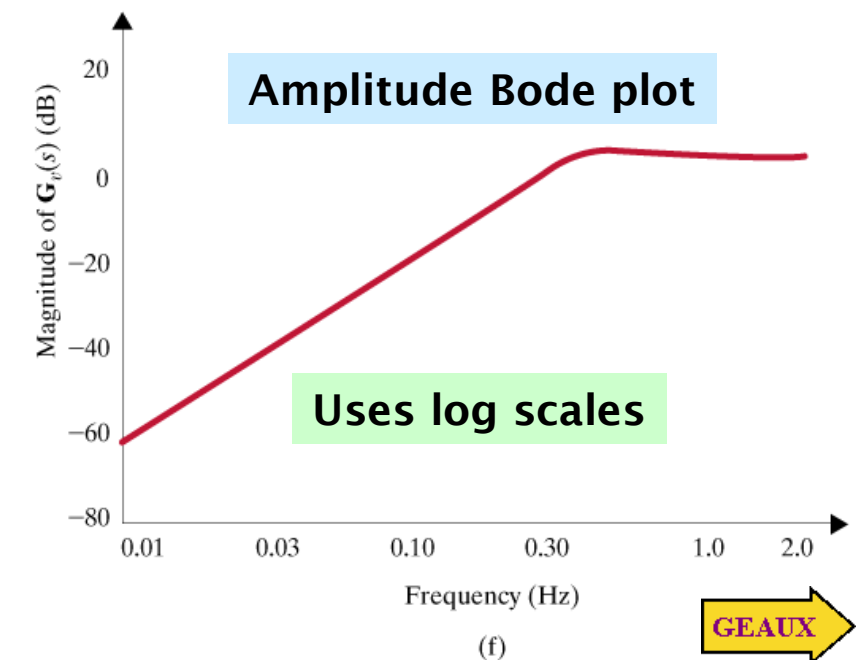
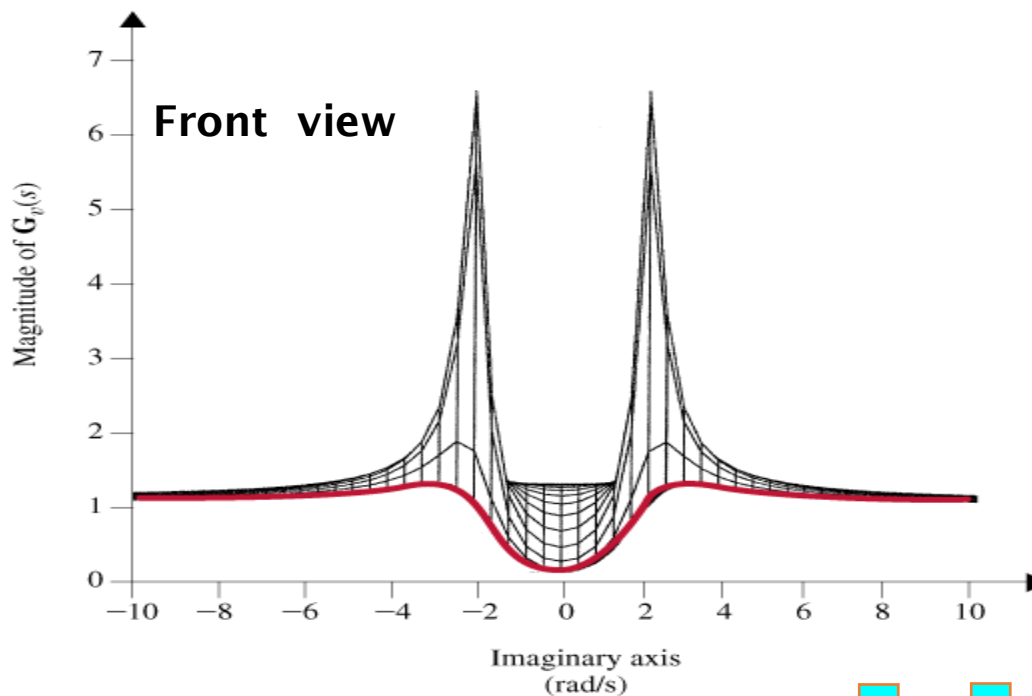
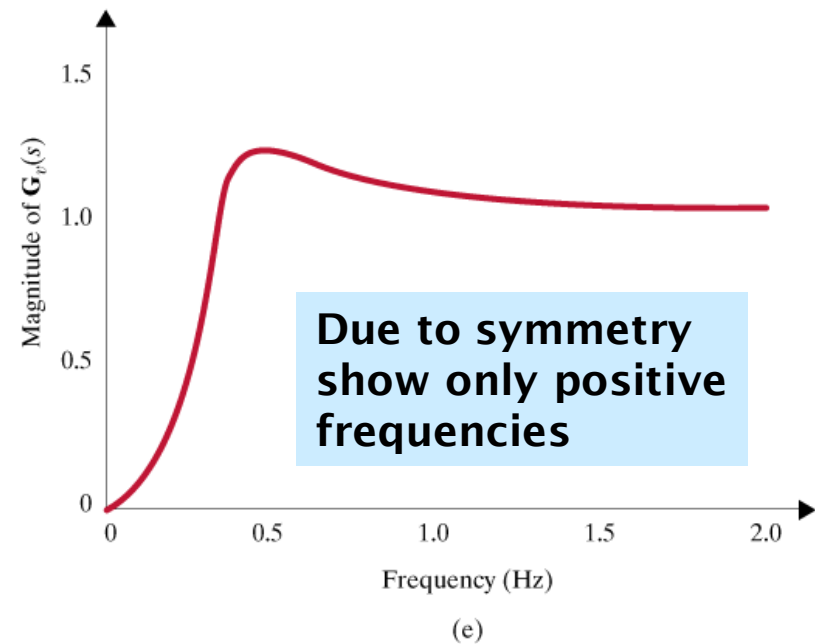
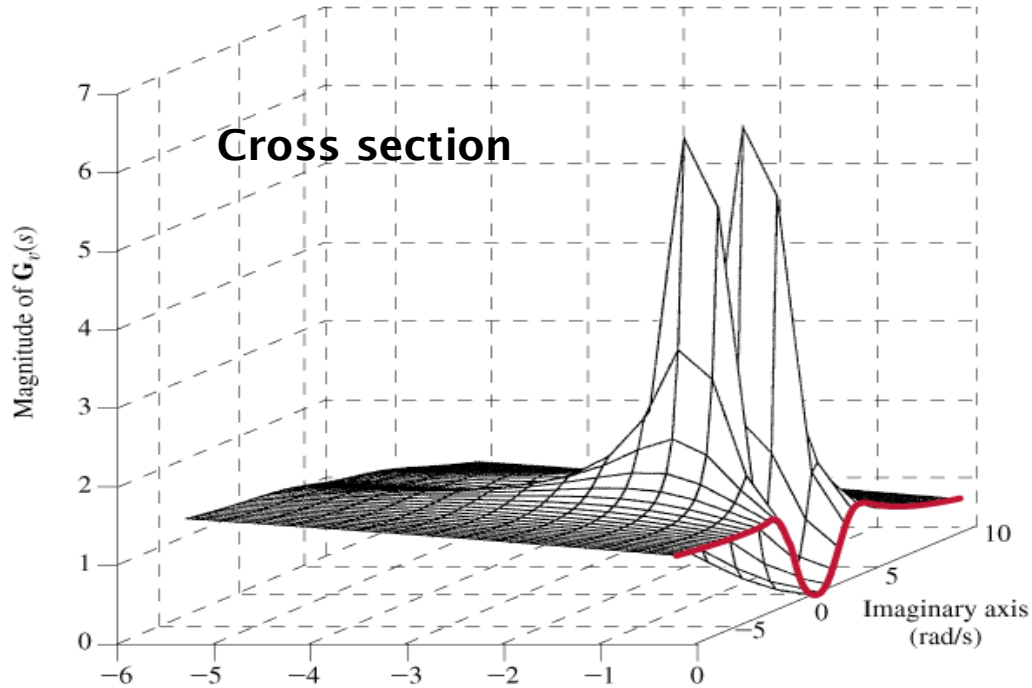
(a)



Cross section shown by Bode

(b)





STEADY STATE RESPONSE

$$Y(s) = H(s)X(s)$$

Response when all initial conditions are zero

Laplace uses positive time functions. Even for sinusoids the response contains transitory terms

EXAMPLE $H(s) = \frac{1}{s+1}, X(s) = \frac{s}{s^2 + \omega^2} (\Rightarrow x(t) = [\cos \omega t]u(t))$

$$Y(s) = \frac{s}{(s+1)(s+j\omega)(s-j\omega)} = \frac{K_1}{s+1} + \frac{K_2}{s+j\omega} + \frac{K_2^*}{s-j\omega}$$

If interested in the steady state response only, then don't determine residues associated with transient terms

$$y(t) = (K_1 e^{-t} + 2 |K_2| \cos(\omega t + \angle K_2^\circ))u(t)$$

transient

Steady state response

If $x(t) = X_M \cos(\omega_o t + \theta)u(t)$

$$y_{ss}(t) = X_M |H(j\omega_o)| \cos(\omega_o t + \angle H(j\omega_o) + \theta)$$

For the general case

$$X_M \cos \omega t u(t) = \frac{X_M}{2} (e^{j\omega t} + e^{-j\omega t}) \Rightarrow X(s) = \frac{1}{2} \left(\frac{X_M}{s - j\omega_o} + \frac{X_M}{s + j\omega_o} \right)$$

$$Y(s) = H(s) \left[\frac{1}{2} \left(\frac{X_M}{s - j\omega_o} + \frac{X_M}{s + j\omega_o} \right) \right] = \frac{K_x}{s - j\omega_o} + \frac{K_x^*}{s + j\omega_o} + \text{transient terms}$$

$$K_x = (s - j\omega_o)Y(s)|_{s=j\omega_o} = \frac{1}{2} X_M H(j\omega_o)$$

$$y(t) = 2 |K_x| \cos(\omega_o t + \angle K_2) + \text{transient terms}$$

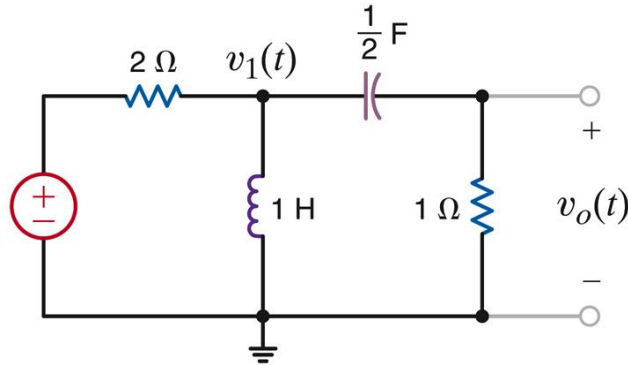
$$y_{ss}(t) = X_M |H(j\omega_o)| \cos(\omega_o t + \angle H(j\omega_o))$$

LEARNING EXAMPLE

Determine the steady state response

$$v_i(t) = 10 \cos 2t u(t) \text{ V}$$

$$\omega_o = 2, X_M = 10$$

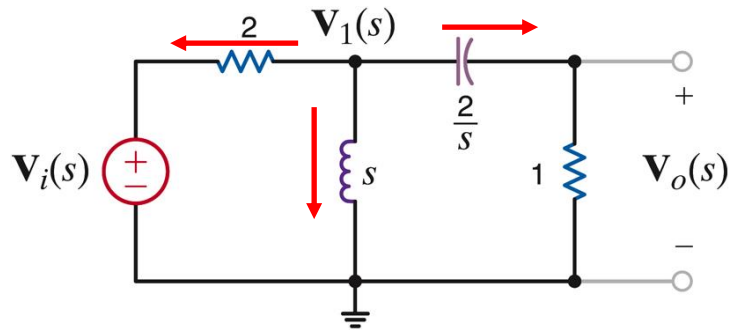


$$\text{If } x(t) = X_M \cos(\omega_o t + \theta) u(t)$$

$$y_{ss}(t) = X_M |H(j\omega_o)| \cos(\omega_o t + \angle H(j\omega_o) + \theta)$$

$$V_o(s) = \frac{s^2}{3s^2 + 4s + 4} V_i(s) \Rightarrow H(s) = \frac{s^2}{3s^2 + 4s + 4}$$

Transform the circuit to the Laplace domain.
Assume all initial conditions are zero



$$H(j2) = \frac{(j2)^2}{3(j2)^2 + 4(j2) + 4} = 0.354 \angle 45^\circ$$

$$\therefore y_s(t) = 3.54 \cos(2t + 45^\circ) \text{ V}$$

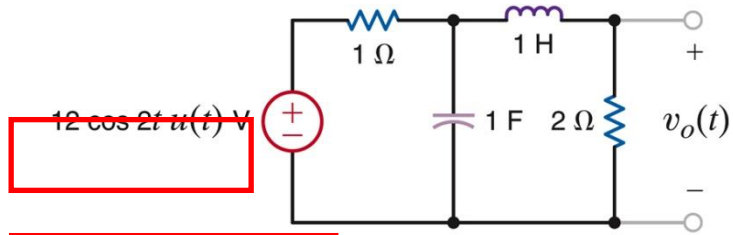
$$\text{KCL@ } V_1: \frac{V_1 - V_i}{2} + \frac{V_1}{s} + \frac{V_1}{\frac{2}{s} + 1} = 0$$

$$\text{Voltage divider: } V_o = \frac{1}{\frac{2}{s} + 1} V_1$$



LEARNING EXTENSION

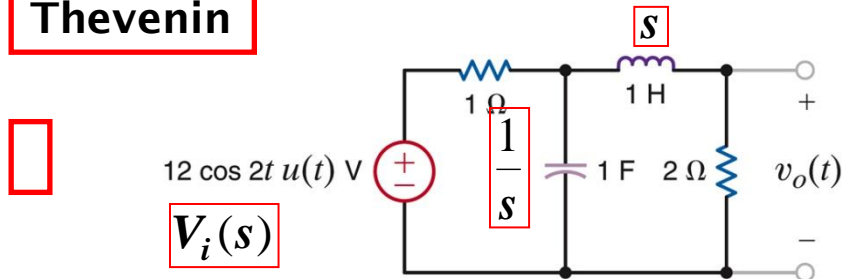
Determine $v_{oss}(t), t > 0$



$$\omega_o = 2, X_M = 12$$

Transform circuit to Laplace domain.
Assume all initial conditions are zero

Thevenin



$$V_{OC}(s) = \frac{1}{1 + \frac{1}{s}} V_i(s) = \frac{1}{s+1} V_i(s)$$

$$Z_{Th}(s) = s + \parallel 1, \frac{1}{s} \parallel = s + \frac{1}{s+1} = \frac{s^2 + s + 1}{s+1}$$

$$\text{If } x(t) = X_M \cos(\omega_o t + \theta) u(t)$$

$$y_{ss}(t) = X_M |H(j\omega_o)| \cos(\omega_o t + \angle H(j\omega_o) + \theta)$$

$$V_o(s) = \frac{2}{2 + Z_{Th}(s)} V_{OC}(s)$$

$$V_o(s) = \frac{2}{2 + \frac{s^2 + s + 1}{s+1}} \times \frac{1}{s+1} V_i(s)$$

$$V_o(s) = \frac{2}{s^2 + 3s + 3} V_i(s)$$

$H(s)$

$$H(j2) = \frac{2}{-4 + 6j + 3} = \frac{2}{-1 + 6j} = \frac{2}{6.08 \angle 99.46^\circ}$$

$$v_{oss}(t) = 12 \times \frac{2}{6.08} \cos(2t - 99.46^\circ)$$

APPLICATION
LAPLACE



TWO – PORT NETWORKS

- A pair of terminals through which a current may enter or leave a network is known as a *port*.
- Two terminal devices or elements (such as resistors, capacitors, and inductors) results in one – port network.
- Most of the circuits we have dealt with so far are two – terminal or one – port circuits.